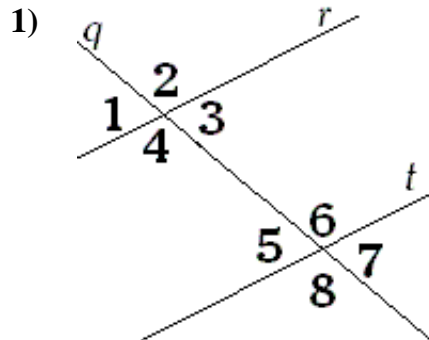
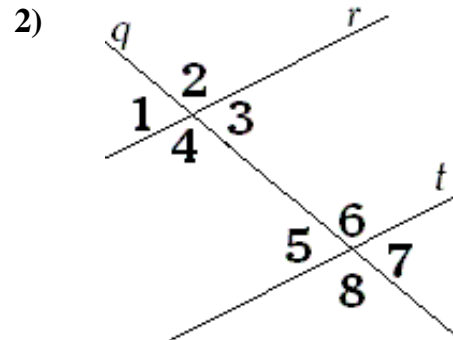


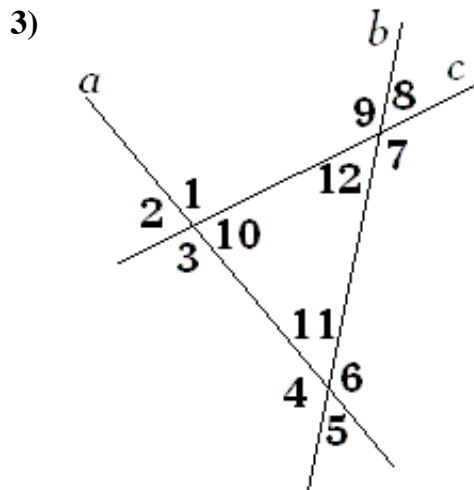
Name the Relationship (if any):



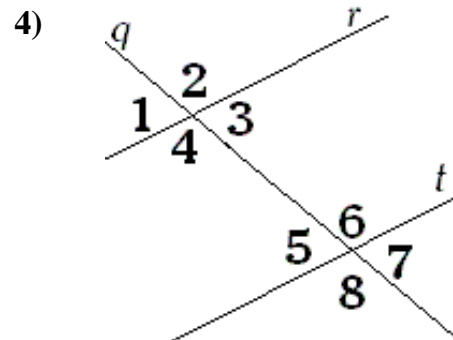
Name the relationship: $\angle 4$ and $\angle 7$



Name the relationship: $\angle 5$ and $\angle 2$

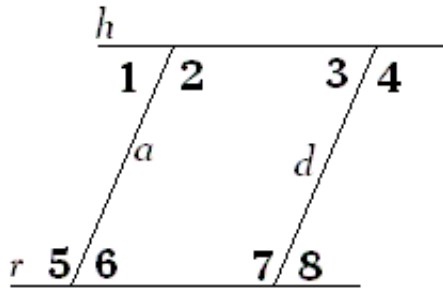


Name the relationship: $\angle 9$ and $\angle 10$



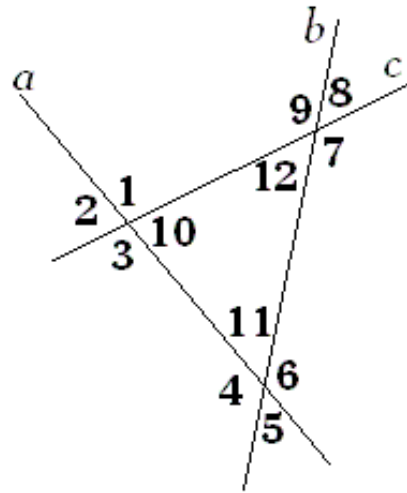
Name the relationship: $\angle 3$ and $\angle 4$

5)



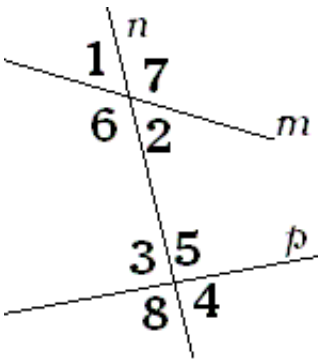
Name the relationship: $\angle 8$ and $\angle 1$

6)



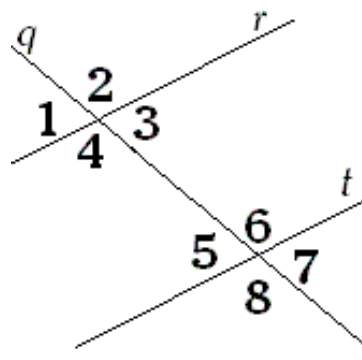
Name the relationship: $\angle 7$ and $\angle 3$

7)



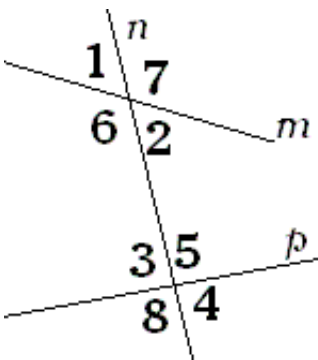
Name the relationship: $\angle 2$ and $\angle 3$

8)



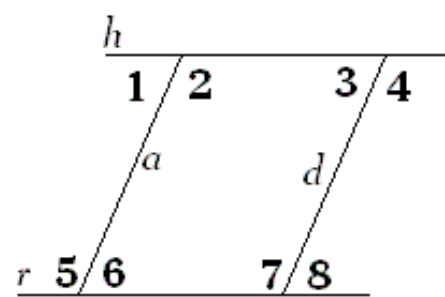
Name the relationship: $\angle 4$ and $\angle 7$

9)



Name the relationship: $\angle 1$ and $\angle 2$

10)



Name the relationship: $\angle 6$ and $\angle 3$